




$$④ -2 + 4 = 2$$




$$⑤ -3 + 7 = 4$$



$$⑥ 6 + (-5) = 1$$



$$⑦ -3 + (-2) = -5$$



$$⑧ 4 + (-5) = -1$$

